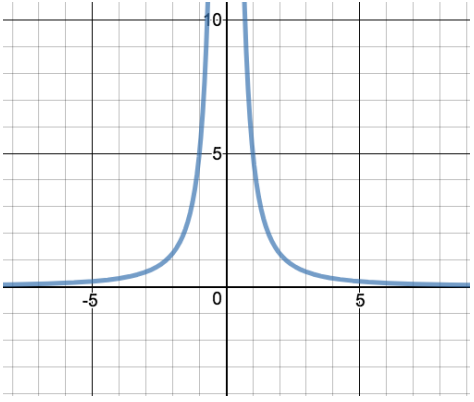
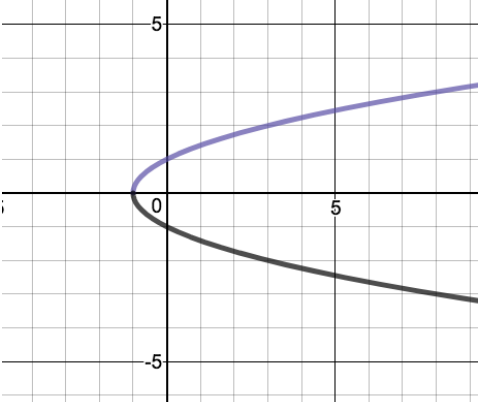
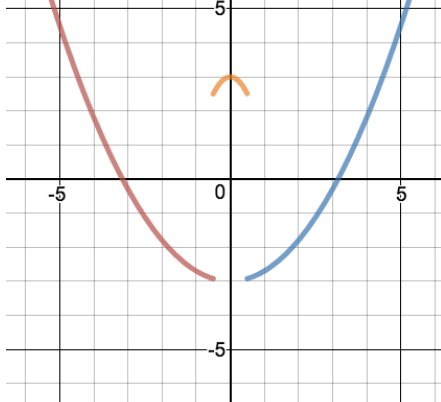


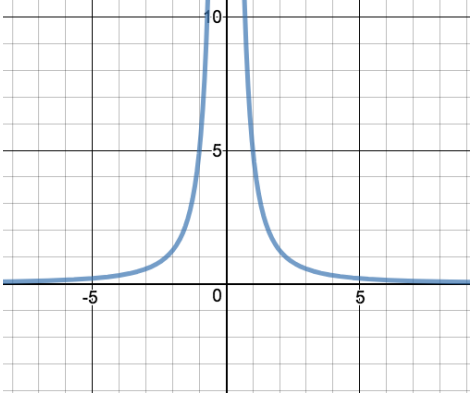
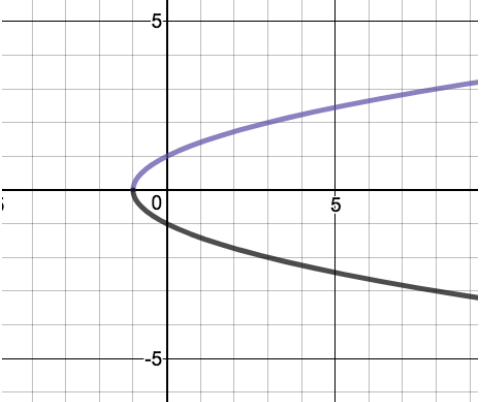
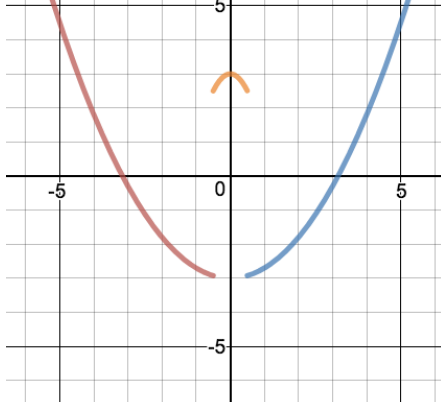
PC 1-4 Practice Problems

Determine if the following functions are even, odd, or neither.

1) $h(x) = \frac{x}{x^2-1}$	2) $f(x) = x^3 + 2$	3) $g(x) = \frac{x^3}{3x^2-9}$	4) $s(x) = \sqrt[3]{2x^2 + 1}$
5) 	6) 	7) 	

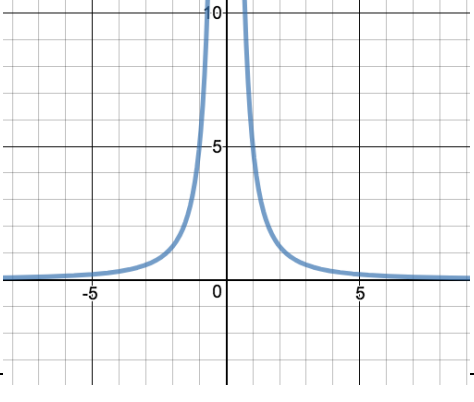
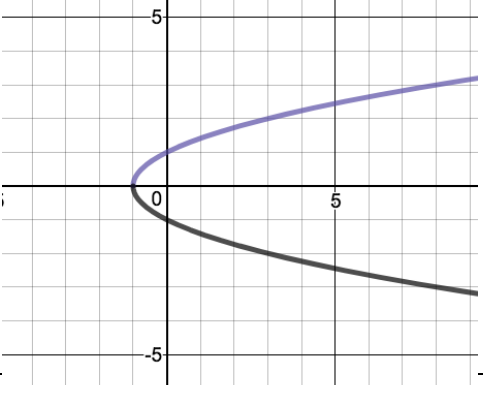
PC 1-4 Practice Problems

Determine if the following functions are even, odd, or neither.

1) $h(x) = \frac{x}{x^2-1}$	2) $f(x) = x^3 + 2$	3) $g(x) = \frac{x^3}{3x^2-9}$	4) $s(x) = \sqrt[3]{2x^2 + 1}$
5) 	6) 	7) 	

PC 1-4 Practice Problems

Determine if the following functions are even, odd, or neither.

1) $h(x) = \frac{x}{x^2-1}$	2) $f(x) = x^3 + 2$	3) $g(x) = \frac{x^3}{3x^2-9}$	4) $s(x) = \sqrt[3]{2x^2 + 1}$
5) 	6) 	7) 