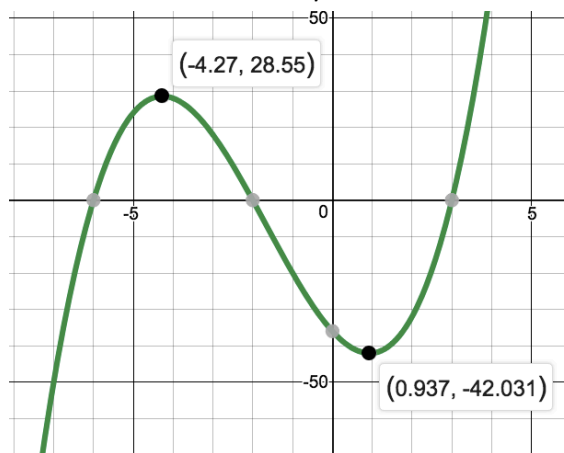


Homework Set PC1-3

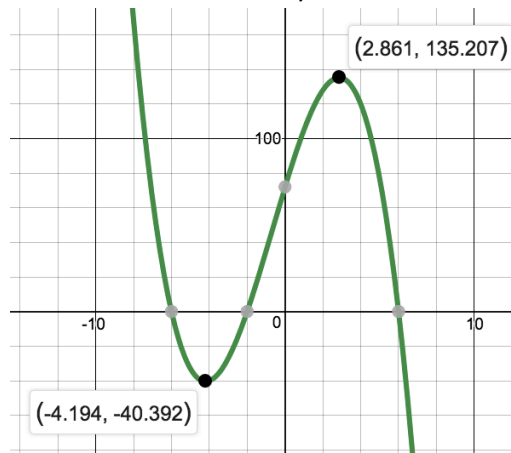
1. Sketch the graph and complete the following:

- a) Intervals for Concave Up/Concave Down
- b) Local **and** Absolute MAX/MIN



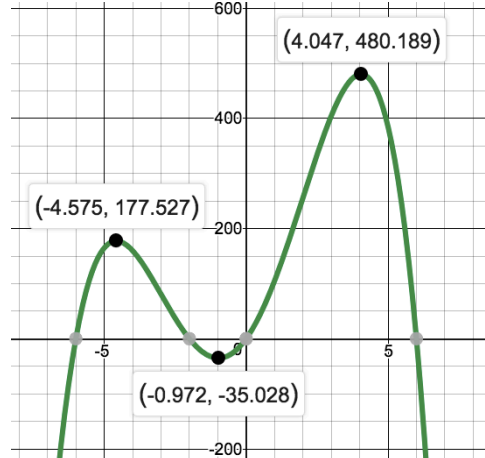
2. Sketch the graph and complete the following:

- a) Intervals for Concave Up/Concave Down
- b) Local **and** Absolute MAX/MIN



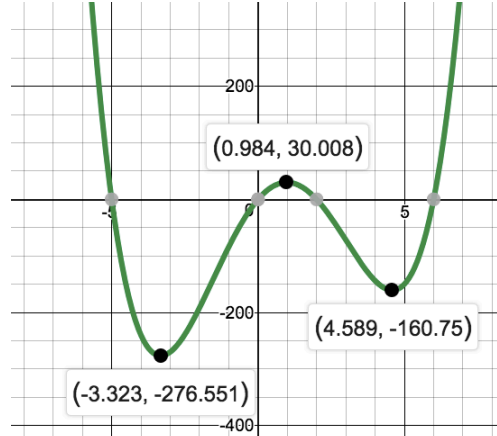
3. Sketch the graph and complete the following:

- a) Intervals for Concave Up/Concave Down
- b) Local **and** Absolute MAX/MIN



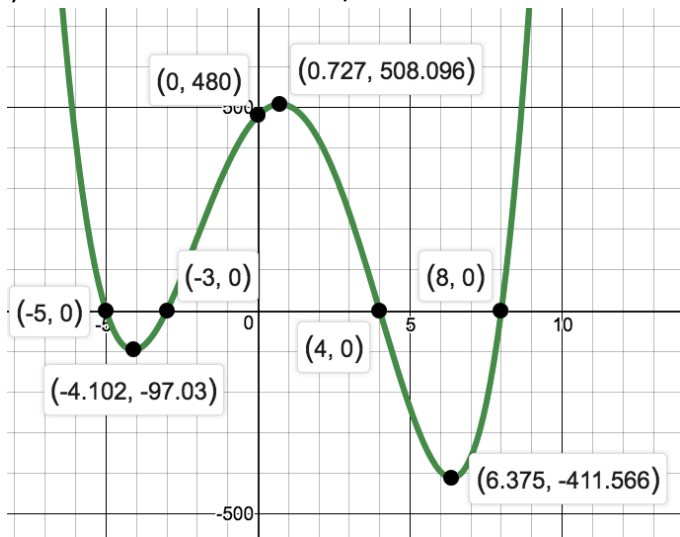
4. Sketch the graph and complete the following:

- a) Intervals for Concave Up/Concave Down
- b) Local **and** Absolute MAX/MIN



5. Sketch the graph and complete the following:

- a) Intervals for Concave Up/Concave Down
- b) Local **and** Absolute MAX/MIN



6. Sketch the graph and complete the following:

- a) Intervals for Concave Up/Concave Down
- b) Local **and** Absolute MAX/MIN

