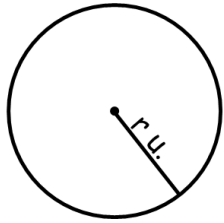


G7-5 Notes- Areas of Circles and Sectors

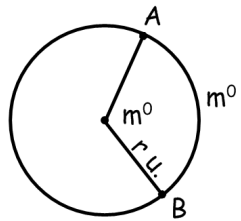


The area of a circle is _____.

Example calculations:

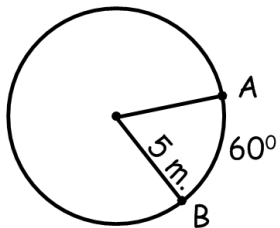
Radius	Area
5 m.	
1 yd.	
3 ft.	

A sector is a portion of the _____.



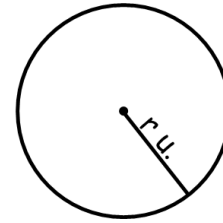
Area=

Example:



Area=

G7-5 Notes- Areas of Circles and Sectors

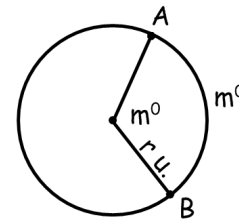


The area of a circle is _____.

Example calculations:

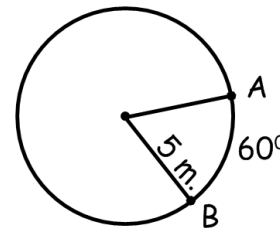
Radius	Area
5 m.	
1 yd.	
3 ft.	

A sector is a portion of the _____.



Area=

Example:



Area=