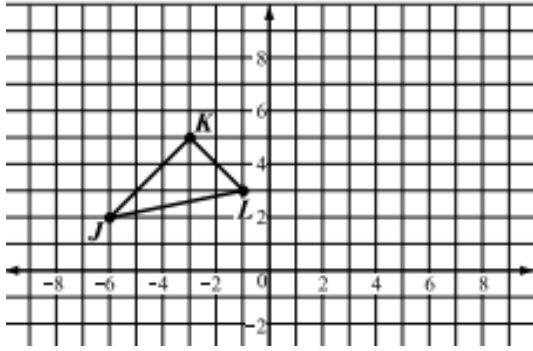


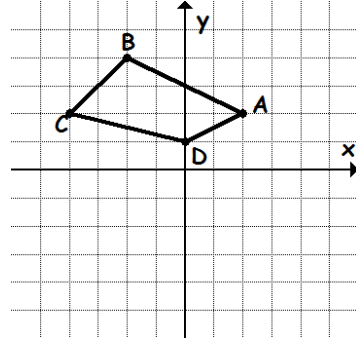
G 2-2 Standard: G1a. I can draw rigid transformations

Reflect the shape over the y-axis and label the points on the image.



Write the Coordinate Rule:

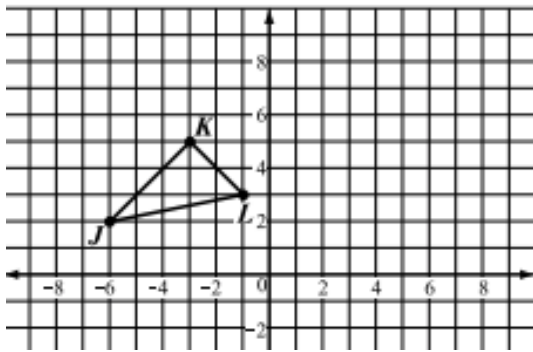
Translate the figure Down 6 and Right 3.



Write the Coordinate Rule:

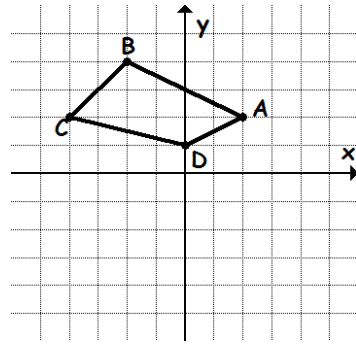
G 2-2 Standard: G1a. I can draw rigid transformations

Reflect the shape over the y-axis and label the points on the image.



Write the Coordinate Rule:

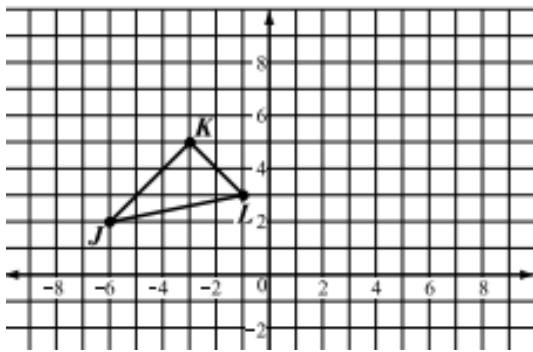
Translate the figure Down 6 and Right 3.



Write the Coordinate Rule:

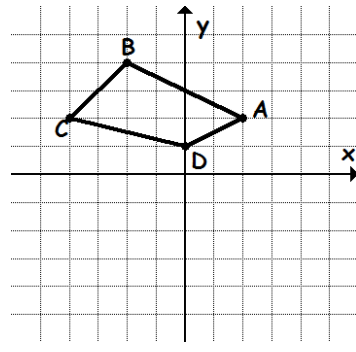
G 2-2 Standard: G1a. I can draw rigid transformations

Reflect the shape over the y-axis and label the points on the image.



Write the Coordinate Rule:

Translate the figure Down 6 and Right 3.



Write the Coordinate Rule: